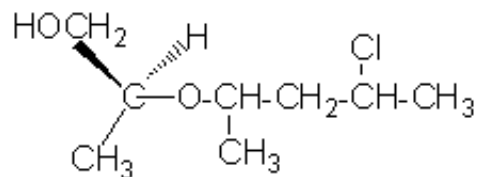


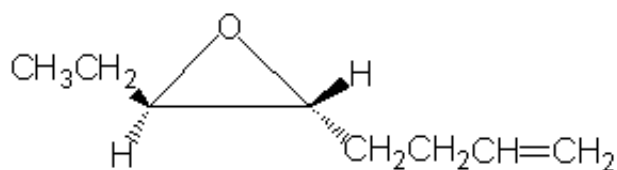
## Quiz 9

Give an acceptable name for each of the compounds below.

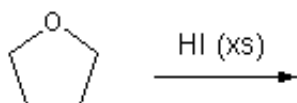
1.



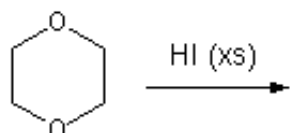
2.



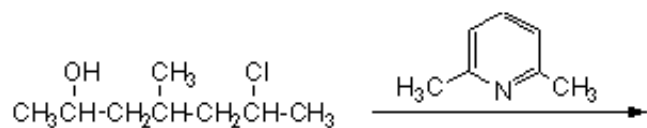
3.



4.



5.



6. Provide a mechanism for the following transformation. Be sure to show all electron movements with curved arrows, show all intermediates, and indicate all formal charges.

